










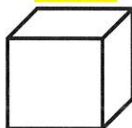
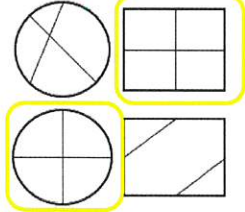



**2<sup>nd</sup> Grade**

**Week 5**

**Answer**

**Keys**

Answer Key - Week 5 Daily Math Bellwork Answer Key

Monday	Tuesday	Wednesday	Thursday
<p>Write 300+ 50 in <b>standard</b> form. <b>350</b></p> <p><b>Word form.</b> <b>Three hundred fifty</b></p>	<p>Count forward by fives. <b>488, 493, 498, 503</b></p> <p>Count forward by tens. <b>675, 685, 695, 705</b></p> <p>Count forward by hundreds. <b>267, 367, 467, 567</b></p>	<p>What is the largest number you can make with 5, 1, and 9? <b>951</b></p>	<p>How many tens are there in 990? <b>99</b></p> <p>505 is the same as <b>5 ones 0 tens 5 hundreds</b></p>
<p>Cassie has 18 purple jelly beans and 24 yellow jelly beans. She eats 19 jelly beans. How many jelly beans are left? <b>23</b></p>	<p>Emma played outside for 35 minutes before lunch, and 43 minutes after lunch. How many minutes did she play altogether? <b>78</b></p>	<p>Jorge is 54 inches tall. Jonathan is 68 inches tall. How much taller is Jonathan than Jorge? <b>14</b></p>	<p>Andrew has 74 toy trains. He decided to give 25 of them to his best friend. How many trains does he have left? <b>49</b></p>
<p>Write the time using AM or PM.</p>  <p><b>2:10</b> AM PM</p> <p>Reading a book</p>	<p>Compare the numbers using &gt; &lt; =</p> <p>987  797</p>	<p>Show 8:20 on the clock below.</p> 	<p>Compare the numbers using &gt; &lt; =</p> <p>201  210</p>
<p>If you have 2 dollar bills, 8 dimes, 2 nickels, and 4 pennies, how much money do you have? <b>\$2.94</b></p>	<p>The height of a chair (seat) is about _____ feet. (circle)</p> <p>1 ft <b>2 ft</b> 5 ft 7 ft</p> 	<p>A bag of chips costs 79 cents. How can you make 79 cents using quarters, dimes, nickels, and pennies? <b>3 quarters, 4 pennies</b></p>	<p>What is the difference in length of the two rectangles? <b>1 inches</b></p> 
<p>Solve. <math>35 + 14 + 64 + 27</math> <b>140</b></p>	<p>Find the difference of <math>324 - 145</math>. <b>179</b></p>	<p>Solve. <math>59 + 23 + 18 + 41</math> <b>141</b></p>	<p>Find the sum of <math>527 + 388</math>. <b>915</b></p>
<p>What is 10 more than 651? <b>661</b></p>	<p>What is 10 less than 198? <b>188</b></p>	<p>What is 100 more than 765? <b>865</b></p>	<p>What is 100 less than 167? <b>67</b></p>
<p>Draw a quadrilateral.</p>  <p>How many angles does it have? <b>4</b></p>	<p>Draw a pentagon.</p>  <p>How many angles does it have? <b>5</b></p>	<p>Draw a hexagon.</p>  <p>How many angles does it have? <b>6</b></p>	<p>What shape has 6 equal faces? <b>A cube</b></p> 
<p>Circle the shapes that are cut into <b>EQUAL</b> pieces.</p> 	<p>Partition the shapes into 2 equal shares.</p> 	<p>Partition the shapes into 3 equal shares.</p> 	<p>Partition the shapes into 4 equal shares.</p> 

## Written Response Answer Key

1. The main characters in this story are Grace, Mrs. Barrington and Thomas Cobb.
2. Grace was surprised to learn there had never been a girl president.
3. Grace believed it would be easy because she had no one running against her. Then Thomas Cobb decided to run making it more difficult to win.
4. At recess Grace gave speeches, but Thomas studied his spelling words.
5. After school, Grace held rallies, but Thomas played soccer.
6. Grace joined the safety squad. She organized a school beautification committee, and she volunteered her time in the school cafeteria.
7. Because he believes she will be the best person for the job.
8. Grace stands before her class and says she will be president when she grows up. And everyone believed that she would.

**\*\*Restate the question and remember capitals and periods.\*\***

## Adding 3-digit numbers in columns (with regrouping)

---

### Grade 2 Addition Worksheet

Find the sum.

$$\begin{array}{r} 1) \quad 117 \\ + 997 \\ \hline 1,114 \end{array}$$

$$\begin{array}{r} 2) \quad 535 \\ + 887 \\ \hline 1,422 \end{array}$$

$$\begin{array}{r} 3) \quad 628 \\ + 89 \\ \hline 717 \end{array}$$

$$\begin{array}{r} 4) \quad 177 \\ + 943 \\ \hline 1,120 \end{array}$$

$$\begin{array}{r} 5) \quad 561 \\ + 969 \\ \hline 1,530 \end{array}$$

$$\begin{array}{r} 6) \quad 544 \\ + 778 \\ \hline 1,322 \end{array}$$

$$\begin{array}{r} 7) \quad 814 \\ + 696 \\ \hline 1,510 \end{array}$$

$$\begin{array}{r} 8) \quad 91 \\ + 739 \\ \hline 830 \end{array}$$

$$\begin{array}{r} 9) \quad 711 \\ + 499 \\ \hline 1,210 \end{array}$$

$$\begin{array}{r} 10) \quad 843 \\ + 699 \\ \hline 1,542 \end{array}$$

$$\begin{array}{r} 11) \quad 647 \\ + 584 \\ \hline 1,231 \end{array}$$

$$\begin{array}{r} 12) \quad 312 \\ + 799 \\ \hline 1,111 \end{array}$$

$$\begin{array}{r} 13) \quad 747 \\ + 668 \\ \hline 1,415 \end{array}$$

$$\begin{array}{r} 14) \quad 371 \\ + 889 \\ \hline 1,260 \end{array}$$

$$\begin{array}{r} 15) \quad 377 \\ + 886 \\ \hline 1,263 \end{array}$$

$$\begin{array}{r} 16) \quad 947 \\ + 766 \\ \hline 1,713 \end{array}$$

$$\begin{array}{r} 17) \quad 283 \\ + 828 \\ \hline 1,111 \end{array}$$

$$\begin{array}{r} 18) \quad 528 \\ + 985 \\ \hline 1,513 \end{array}$$

$$\begin{array}{r} 19) \quad 963 \\ + 579 \\ \hline 1,542 \end{array}$$


$$\begin{array}{r} 20) \quad 534 \\ + 998 \\ \hline 1,532 \end{array}$$

# Telling time - quarter hours

## Grade 2 Time Worksheet


Write the time below each clock.

1.




12:15

2.




2:00

3.




3:00

4.




1:30

5.




9:00

6.




4:15

7.




4:30

8.



3:30

9.



11:30

# Grace for President Spelling Sentences **Key**

Name \_\_\_\_\_

Often there is more than one word that will complete the sentence. Choose the best answer. Hint: If you are unsure of an answer, move on and come back to it last.

midair misplace mislead midway misprint midday  
midweek misbehave midyear mismatch misdeed mistake

1. We will take a vacation in June, around midyear.
2. Don't misplace your ball cap before the big game tomorrow.
3. The story in the reading book had a misprint in it.
4. In December we will be midway through the school year.
5. We eat lunch around midday.
6. Her red shoe and her blue shoe are a mismatch.
7. A misdeed can occur when someone is not thinking clearly.
8. Be careful to check your work for a mistake before turning it in.
9. We will take a quiz midweek, on Wednesday.
10. The magician made the woman float in midair.
11. Don't let other people mislead and convince you to do something you shouldn't.
12. If you misbehave then you may not get a recess.



## Subtracting 3-digit numbers, with regrouping

### Grade 2 Subtraction Worksheet

Find the difference.

$$\begin{array}{r} 1. \quad 108 \\ - \quad 69 \\ \hline 39 \end{array}$$

$$\begin{array}{r} 2. \quad 384 \\ - \quad 297 \\ \hline 87 \end{array}$$

$$\begin{array}{r} 3. \quad 988 \\ - \quad 399 \\ \hline 589 \end{array}$$

$$\begin{array}{r} 4. \quad 876 \\ - \quad 699 \\ \hline 177 \end{array}$$

$$\begin{array}{r} 5. \quad 972 \\ - \quad 785 \\ \hline 187 \end{array}$$

$$\begin{array}{r} 6. \quad 217 \\ - \quad 78 \\ \hline 139 \end{array}$$

$$\begin{array}{r} 7. \quad 104 \\ - \quad 9 \\ \hline 95 \end{array}$$

$$\begin{array}{r} 8. \quad 553 \\ - \quad 494 \\ \hline 59 \end{array}$$

$$\begin{array}{r} 9. \quad 184 \\ - \quad 99 \\ \hline 85 \end{array}$$

$$\begin{array}{r} 10. \quad 460 \\ - \quad 375 \\ \hline 85 \end{array}$$

$$\begin{array}{r} 11. \quad 421 \\ - \quad 42 \\ \hline 379 \end{array}$$

$$\begin{array}{r} 12. \quad 950 \\ - \quad 177 \\ \hline 773 \end{array}$$

## Answers

1.  $139 + 22 = 61$

Pat had 161 stickers at the end of the week.

2.  $105 - 56 = 49$

Kelly needs to pick 49 more apples.

3.  $54 - 16 = 38$

Todd had 38 pieces of gum to start with.

4.  $142 - 31 = 111$

Josh has 111 pencils left.

5.  $304 - 276 = 28$

Nell gave Jeff 28 cards.

6.  $38 + 13 + 4 = 55$

Sarah had 55 trucks to start with.

7.  $117 - 40 = 77$

There are 77 girls on the playground.



# Grace for President Meaning Match! Key


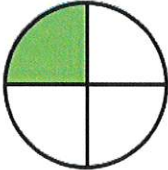

Match a word from the box to its correct definition.

assembly election microphone rallies slogan speeches

hour clothes only neighbor question taught money

1. \_\_hour\_\_ - a unit of time equal to 60 minutes
2. \_\_election\_\_ - the act of choosing by vote
3. \_\_question\_\_ - a sentence that asks for information
4. \_\_assembly\_\_ - a group of people gathered for some purpose
5. \_\_taught\_\_ - the past tense of teach
6. \_\_microphone\_\_ - an electrical device that makes sound such as voices louder
7. \_\_money\_\_ - what you earn when you work
8. \_\_clothes\_\_ - things that you wear
9. \_\_rallies\_\_ - meetings of large crowds in support of something
10. \_\_neighbor\_\_ - someone who lives next to you or nearby
11. \_\_speeches\_\_ - public talks
12. \_\_only\_\_ - no one or nothing except
13. \_\_slogan\_\_ - a word or phrase used by a person or group that states its purpose, a motto

Week 5 Daily Math Bellwork Quiz- ANSWER KEY

<p>1. 2.NBT.A.1 Write the number.</p> <p>12 ones 15 tens 7 hundreds</p> <div style="border: 1px solid black; padding: 5px; display: inline-block; margin-left: 100px;">862</div>	<p>2. 2.MD.C.7 Write the time using AM or PM. <b>Snack time</b></p>  <p>3:30 AM or PM</p>
<p>3. 2.MD.A.3 The length of a piece of paper (long side) is about _____ inches? (circle one)</p> <p>7 in    10 in    18 in</p>	<p>4. 2.NBT.B.6 Solve.</p> $33 + 19 + 46 + 29$ <p style="text-align: center;">127</p>
<p>5. 2.MD.C.8 A juice box costs \$0.69. Using the fewest number of coins, how many of each type will you need to purchase a juice box?</p> <p>2 quarters    1 nickels 1 dimes    4 pennies</p>	<p>6. 2.NBT.B.8 What is... <span style="border: 1px solid black; padding: 5px; display: inline-block; margin-left: 20px;">498</span></p> <p>Ten more? 508 Ten less? 488 One hundred more? 598 One hundred less? 398</p>
<p>7. 2.NBT.B.7 Solve.</p> $538 + 476$ <p style="text-align: center;">1,014</p> $623 - 277$ <p style="text-align: center;">346</p>	<p>8. 2.GA.2, 2.GA.3 Partition the shapes into 4 equal pieces. Color in one piece of the rectangle. What portion is colored?</p> <p style="text-align: center;">One fourth</p> <div style="display: flex; justify-content: center; gap: 20px;">   </div>

## Grace for President **Key**

Name\_\_\_\_\_

*I can find missing words in a sentence.*

Directions: Fill in the circle next to the correct answer.

1. Can you write a \_\_\_\_\_ for our next campaign?  
 speeches       election       rallies       slogan
2. We will have an \_\_\_\_\_ at one o'clock today in the gymnasium.  
 assembly       microphone       neighbor       hour
3. Frank will write two \_\_\_\_\_ for his friend Sam.  
 speeches       rallies       slogan       clothes
4. Kimberly found her \_\_\_\_\_ in the back yard playing catch.  
 clothes       question       neighbor       rallies
5. We heard a lot of cheering at the two \_\_\_\_\_ we attended.  
 neighbor       rallies       election       slogan
6. Our President \_\_\_\_\_ us to respect our country and our flag.  
 microphone       only       assembly       taught
7. Can we have an \_\_\_\_\_ for class president in May?  
 rallies       election       slogan       speeches
8. Grace needed to use the \_\_\_\_\_ in order to be heard above the crowd.  
 assembly       election       slogan       microphone
9. I cannot find the \_\_\_\_\_ you gave me yesterday.  
 hour       money       only       neighbor

Circle all the pronouns in each sentence.

10. **She** is so happy **her** friend won the election.
11. Will **we** get to go to the park on Friday?
12. Sam doesn't think **they** will be able to finish on time.

What will happen next?

13. First, we plant the seed.

- Next, it grows to be an adult frog.       Next, it will be an adult plant .  
 Next, the seed will sprout.       Next, it will become a flower.

14. First, we pack some food for a picnic lunch.

- Next, we eat our picnic lunch.       Next, we finish eating.  
 Next, we unpack our picnic lunch.       Next, we go to the park.

15. First, I take my kite to an open field.

- Next, I buy a kite at the store.       Next, I let out the string to fly my kite.  
 Next, I read a book.       Next, I take my kite home.

16. What does the prefix non- mean?

- without       before       again       not

17. Mark the word that means meetings of large crowds in support of something.

- slogan       assembly       rallies       election

18. Mark the word that means public talks.

- assembly       microphone       election       speeches

19. Mark the word that means the act of choosing by vote.

- assembly       election       slogan       annoy

20. Find the word that has the same number of syllables as assembly.

- disgrace       display       disagree       dislike

21. Which word is a verb?

- election       assembly       person       voting

22. Which word is an adjective?

- dark       pours       pounds       kitten