

2nd Grade

Week 3

Answer

Keys

Answer Key - Week 3 Daily Math Bellwork

Monday	Tuesday	Wednesday	Thursday																								
<p>Write 574 in expanded form. $500 + 70 + 4$</p> <p>Word form. Five hundred seventy-four</p>	<p>Count forward by fives. 555, 560, 565, 570</p> <p>Count forward by tens. 475, 485, 495, 505</p> <p>Count forward by hundreds. 270, 370, 470, 570</p>	<p>Draw 302 with base ten blocks in the place value chart.</p> <table border="1"> <tr> <th>Hundreds</th> <th>Tens</th> <th>Ones</th> </tr> <tr> <td align="center"> </td> <td></td> <td align="center"> </td> </tr> </table>	Hundreds	Tens	Ones				<p>How many tens are there in 910? 91</p> <p>309 is the same as 9 ones 0 tens 3 hundreds</p>																		
Hundreds	Tens	Ones																									
<p>Each day Emma makes paper origami for her friends. On the first day she made 9, the second day she made 12, and the third day she made 7. How many did she make altogether? 28</p>	<p>A pizza delivery man delivered 25 pizzas at lunch time and 38 pizzas at dinner time. How many pizzas did he deliver altogether? 63</p>	<p>On Monday, a shoe store sold 25 pairs of shoes. On Tuesday, they sold 17 pairs of shoes. On Wednesday, 8 pairs of shoes were returned to the store. How many pairs of shoes did the shoe store sell without being returned? 34</p>	<p>Emma put 38 toys into a basket. Her sister took 15 of those toys out of the basket. How many toys are still in the basket? 23</p>																								
<p>Write the time using AM or PM.</p> <p>5:40 AM PM</p> <p>Eating Dinner.</p>	<p>Compare the numbers using $>$ $<$ $=$</p> <p>423 $>$ 243</p>	<p>Show 3:55 on the clock below.</p>	<p>Compare the numbers using $>$ $<$ $=$</p> <p>245 $>$ 238</p>																								
<p>Brian is measuring string he is going to use to go fishing. So far his string is 3 feet. He adds on 5 more feet. How long is his fishing string now? 8 feet</p>	<p>The height of a box of cereal is about _____ inches. (circle)</p> <p>3in 7in 15in 27in</p>	<p>Karen's paper is 12 inches long. She cuts off 4 inches. How long is her paper now? 8 inches</p>	<p>What is the difference in length of the two rectangles?</p> <p align="center">2 Inches</p>																								
<p>Solve. $18 + 54 + 38 + 56$ 166</p>	<p>Solve. $87 + 12 + 31 + 44$ 174</p>	<p>Solve. $43 + 27 + 88 + 16$ 174</p>	<p>Solve. $29 + 43 + 53 + 62$ 187</p>																								
<p>Show one way you can make 87 cents using quarters, dimes, nickels, and pennies. 3 quarters, 1 dime, 2 pennies</p>	<p>If you have 3 dollar bills, 1 quarter, 2 dimes, 3 nickels, and 4 pennies, how much money do you have? \$3.64</p>	<p>Mark went shopping and spent 4 dollar bills, 4 dimes, and 6 pennies. How much did he spend? \$4.46</p>	<p>Jake paid for a pencil with 3 dimes, 1 nickel, and 4 pennies. How much was the pencil? 39¢</p>																								
<p>What is 10 more than 157? 167</p>	<p>What is 10 less than 283? 273</p>	<p>What is 100 more than 548? 648</p>	<p>What is 100 less than 721? 621</p>																								
<p>Find the sum of $235 + 312$. 547</p> <table border="1"> <tr> <th>#</th> <th>Hundreds</th> <th>Tens</th> <th>Ones</th> </tr> <tr> <td>235</td> <td align="center"> </td> <td></td> <td></td> </tr> <tr> <td>312</td> <td align="center"> </td> <td></td> <td></td> </tr> </table>	#	Hundreds	Tens	Ones	235				312				<p>Find the difference of $344 - 123$. 221</p> <table border="1"> <tr> <th>#</th> <th>Hundreds</th> <th>Tens</th> <th>Ones</th> </tr> <tr> <td>344</td> <td align="center"> </td> <td></td> <td></td> </tr> <tr> <td>123</td> <td align="center"> </td> <td></td> <td></td> </tr> </table>	#	Hundreds	Tens	Ones	344				123				<p>Find the sum of $157 + 238$. 395</p>	<p>Find the difference of $354 - 236$. 118</p>
#	Hundreds	Tens	Ones																								
235																											
312																											
#	Hundreds	Tens	Ones																								
344																											
123																											



Adding 3-digit numbers in columns (with regrouping)

Grade 2 Addition Worksheet

Find the sum.

$$\begin{array}{r} 1) \quad 872 \\ + 468 \\ \hline 1,340 \end{array}$$

$$\begin{array}{r} 2) \quad 729 \\ + 999 \\ \hline 1,728 \end{array}$$

$$\begin{array}{r} 3) \quad 411 \\ + 799 \\ \hline 1,210 \end{array}$$

$$\begin{array}{r} 4) \quad 19 \\ + 198 \\ \hline 217 \end{array}$$

$$\begin{array}{r} 5) \quad 423 \\ + 799 \\ \hline 1,222 \end{array}$$

$$\begin{array}{r} 6) \quad 763 \\ + 668 \\ \hline 1,431 \end{array}$$

$$\begin{array}{r} 7) \quad 268 \\ + 944 \\ \hline 1,212 \end{array}$$

$$\begin{array}{r} 8) \quad 853 \\ + 297 \\ \hline 1,150 \end{array}$$

$$\begin{array}{r} 9) \quad 617 \\ + 696 \\ \hline 1,313 \end{array}$$

$$\begin{array}{r} 10) \quad 249 \\ + 966 \\ \hline 1,215 \end{array}$$

$$\begin{array}{r} 11) \quad 451 \\ + 679 \\ \hline 1,130 \end{array}$$

$$\begin{array}{r} 12) \quad 945 \\ + 78 \\ \hline 1,023 \end{array}$$

$$\begin{array}{r} 13) \quad 965 \\ + 455 \\ \hline 1,420 \end{array}$$

$$\begin{array}{r} 14) \quad 512 \\ + 799 \\ \hline 1,311 \end{array}$$

$$\begin{array}{r} 15) \quad 518 \\ + 697 \\ \hline 1,215 \end{array}$$

$$\begin{array}{r} 16) \quad 268 \\ + 955 \\ \hline 1,223 \end{array}$$

$$\begin{array}{r} 17) \quad 46 \\ + 576 \\ \hline 622 \end{array}$$

$$\begin{array}{r} 18) \quad 127 \\ + 997 \\ \hline 1,124 \end{array}$$

$$\begin{array}{r} 19) \quad 391 \\ + 939 \\ \hline 1,330 \end{array}$$

$$\begin{array}{r} 20) \quad 93 \\ + 217 \\ \hline 310 \end{array}$$

PREPOSITION PREP!

Underline or highlight the preposition in each sentence below.

1. Betty walked up the stairs.
2. Mrs. Emmons will walk around the classroom.
3. Fido hid his bone under the bed.
4. Mom asked us to put our things behind the door.
5. It is too cold to leave the house without a coat.
6. My teacher grades papers during her lunch.
7. My birthday party will be at 6:00 p.m.
8. The Wildcats will practice before the game.
9. Sara likes to swim in the summer.
10. Did your mom park between those two cars?
11. Jimmy ran toward the finish line.
12. Jack and Jill ran up the hill.

A Birthday Ba
Sandy





Subtracting 3-digit numbers, with regrouping

Grade 2 Subtraction Worksheet

Find the difference.

$$\begin{array}{r} 1. \quad 110 \\ - \quad 47 \\ \hline \quad 63 \end{array}$$

$$\begin{array}{r} 2. \quad 334 \\ - \quad 85 \\ \hline \quad 249 \end{array}$$

$$\begin{array}{r} 3. \quad 248 \\ - \quad 169 \\ \hline \quad 79 \end{array}$$

$$\begin{array}{r} 4. \quad 215 \\ - \quad 147 \\ \hline \quad 68 \end{array}$$

$$\begin{array}{r} 5. \quad 248 \\ - \quad 89 \\ \hline \quad 159 \end{array}$$

$$\begin{array}{r} 6. \quad 944 \\ - \quad 586 \\ \hline \quad 358 \end{array}$$

$$\begin{array}{r} 7. \quad 704 \\ - \quad 418 \\ \hline \quad 286 \end{array}$$

$$\begin{array}{r} 8. \quad 676 \\ - \quad 599 \\ \hline \quad 77 \end{array}$$

$$\begin{array}{r} 9. \quad 432 \\ - \quad 376 \\ \hline \quad 56 \end{array}$$

$$\begin{array}{r} 10. \quad 988 \\ - \quad 599 \\ \hline \quad 389 \end{array}$$

$$\begin{array}{r} 11. \quad 521 \\ - \quad 132 \\ \hline \quad 389 \end{array}$$

$$\begin{array}{r} 12. \quad 268 \\ - \quad 189 \\ \hline \quad 79 \end{array}$$

A Birthday Basket for Tia Amazing Words!

Match a word from the box to its correct definition. **Key**

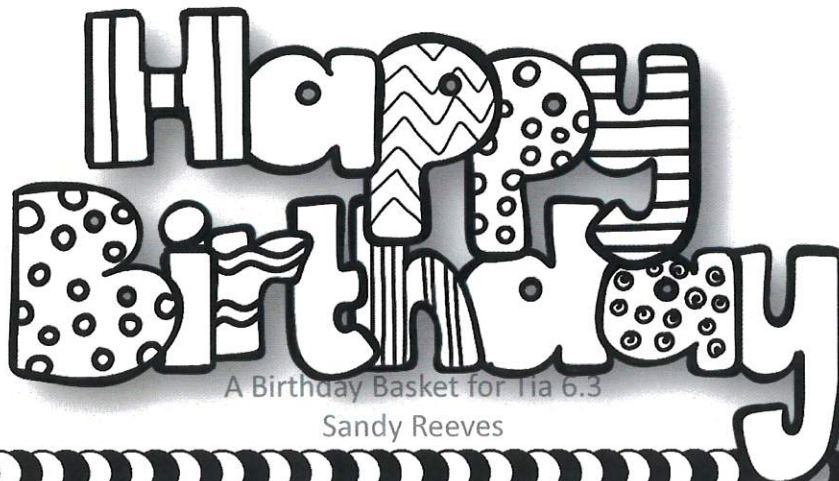
celebration
inspect

custom
angle

tradition
brilliant

create
snapshot

1. **brilliant** - to be very bright or sparkling
2. **celebration** - when people come together and have a good time
3. **inspect** - to look at something very carefully
4. **snapshot** - a simple picture taken with a camera
5. **custom** - something people always do, or have done for a long time
6. **create** - to make something that hasn't been made before
7. **tradition** - a custom or belief that is handed down from generation to generation
8. **angle** - the way you look at something



Answers

1. $547 - 434 = 113$

She needs to earn \$113 more.

2. $28 + 35 = 63$

There were 63 children in all.

3. $151 - 28 = 123$

123 geese were left.

4. $407 - 129 = 278$

The elephant had 278 peanuts left.

5. $44 + 53 - 3 = 94$

There were 94 children on the playground when the bell rang.



6. $58 + 37 = 95$

There were 95 birds in all.

7. $42 + 78 = 120$

Paul had 120 strawberries.

Week 3 Math Quiz- ANSWER KEY

<p>1. 2.NBT.A.1 Fill in the blank.</p> <p>440 is the same as</p> <p>44 tens.</p>	<p>2. 2.OA.A.1 Solve.</p> <p>$78 + 64 = \mathbf{142}$ $92 - 65 = \mathbf{27}$</p>
<p>3. 2.MD.C.7 Write the time using AM or PM. Math Class</p>  <p>9:45 AM or PM</p>	<p>4. 2.MD.A.4 What is the difference in length of the two lines?</p> <p>9 centimeters</p> 
<p>5. 2.NBT.B.6 Solve.</p> <p>$66 + 45 + 82 + 19$</p> <p>212</p>	<p>6. 2.MD.C.8 Evelyn bought a folder with 3 quarters, 2 dimes, and 4 pennies. How much was the folder?</p> <p>\$0.99</p>
<p>7. 2.NBT.B.8 What is...</p> <div style="border: 1px solid black; display: inline-block; padding: 5px; margin: 10px 0;">342</div> <p>Ten more? 352</p> <p>Ten less? 332</p> <p>One hundred more? 442</p> <p>One hundred less? 242</p>	<p>8. 2.NBT.B.7 Find the sum.</p> <p>$244 + 132$</p> <p>376</p>

A Birthday Basket for Tia

Name _____

I can find missing words in a sentence.

Directions: Fill in the circle next to the correct answer.

- I bought Mom a _____ for her birthday.
 favorite tia present aunt
- Rosa is looking forward to visiting her _____ this summer.
 aunt collects piñata ninetieth
- She will wear a blindfold and use a stick to break the _____.
 favorite piñata collects bank
- Is there any fruit left in the brown _____?
 ninetieth aunt favorite basket
- My teacher _____ the papers once the test is complete.
 tia collects bank present
- Today is my grandmother's _____ birthday.
 ninetieth aunt basket piñata
- Joe slid into a _____ of snow when he was sledding down the hill.
 bank favorite collects tia
- My _____ is coming to my graduation celebration.
 basket collects tia present
- Today is a special day, so I will wear my _____ shirt to school.
 bank aunt piñata favorite

10. Mark the one that is written correctly.
 Tuesday May 9 Tuesday, May 9
 Tuesday, may 9 tuesday, may 9
11. Mark the one that is written correctly.
 July, 24 2015 July 24 2015
 July 24, 2015 July 24 2015,
12. Mark the one that is written correctly.
 Bay, KY 41010 Bay KY, 41010
 Bay, ky 41010 bay, KY 41010
13. Mark the word that means the thing liked better than others.
 great favorite bank collects
14. Mark the word that means a container made of woven strips of wood.
 box bank basket present
15. Mark the word that means brings things together or gathers them.
 buys makes basket collects
16. Find the word that has the same number of syllables as favorite.
 piñata flavor paper flower
17. Mark the definition for the underlined multiple meaning word in the sentence.
 John and his father sat on the bank hoping to catch some fish.
 counting on a place where money is kept sloping land beside a river
18. Mark the definition for the underlined word in the sentence.
 We are working on reading at the present time.
 a gift, something given happening now
19. Mark the definition for the underlined word in the sentence.
 Recess will begin when we hear the bell ring.
 make a musical sound round band worn on your finger

Write -tion or -ture to finish the word.

20. mois ture

21. vaca tion

22. pas ture