

Monday

Number of the Day


415

Word Form

Base Ten Blocks

Expanded Form

Name: _____



ADDITION FLUENCY #1

$7+9=_____$

$13+2=_____$

$2+15=_____$

$5+3=_____$

$7+4=_____$

$0+12=_____$

$0+20=_____$

$3+4=_____$

$9+6=_____$

$3+14=_____$

$4+15=_____$

$19+0=_____$

$3+6=_____$

$6+5=_____$

$16+2=_____$

$14+4=_____$

$15+2=_____$

$8+8=_____$

$9+4=_____$


$3+11=_____$

Name: _____


CCSS 2.MD.7 Tell and write time from analog and digital clocks to the nearest...

Telling Time to Five Minutes


Write in the digital time.




:




:




:




:




:




:



:



:



:

Compare and Contrast

Just Like Josh Gibson

Compare and contrast Josh Gibson and Grandmama.

Both

Josh Gibson

Grandmama

Tuesday

Number of the Day

___ < ___

430

Odd or Even

Hundreds	Tens	Ones

10 More


10 Less

100 More

100 Less

Name: _____

SUBTRACTION FLUENCY #1



$8-8=_____$

$14-7=_____$

$14-12=_____$

$20-12=_____$

$7-5=_____$

$10-7=_____$

$3-2=_____$

$12-9=_____$

$17-13=_____$

$15-2=_____$

$13-10=_____$

$6-4=_____$

$6-3=_____$

$19-6=_____$

$12-5=_____$

$17-17=_____$

$9-4=_____$

$13-5=_____$

$17-6=_____$

$5-4=_____$

Name: _____

CCSS 2.MD.8
Prerequisite, Primer


6 Count to see how much money my students had in their pockets. Don't forget to write the value of each coin above and the running count below. (IF YOUR TEACHER WANTS YOU TO)



Total



Total



Total



Total



Total

Catching on to Contractions!



Cut out each contraction and glue it next to the sentence with the underlined words it could replace.

1. Sara could have done better on the test if she had studied.
2. I don't believe we have seen this movie.
3. Do you think she had been here before?
4. Roger said he had tried to run faster.
5. I think they would love learning a sing.
6. I have not visited my friend for a week.
7. Carly thinks they are going to the zoo.
8. But we are going to the museum instead.
9. You do not have any homework tonight.
10. Casey will not join the club.

we've

he'd

I've

we're

won't

don't

they're

they'd

she'd

could've



Wednesday

Number of the Day


239

Word Form

Base Ten Blocks

Expanded Form

Name: _____



ADDITION FLUENCY #2

$5+11=$ _____

$12+7=$ _____

$9+9=$ _____

$3+12=$ _____

$17+3=$ _____

$1+8=$ _____

$3+9=$ _____

$15+2=$ _____

$14+2=$ _____

$5+6=$ _____

$0+9=$ _____

$9+8=$ _____

$1+2=$ _____

$0+18=$ _____

$9+7=$ _____

$2+5=$ _____

$10+2=$ _____


$10+4=$ _____

$4+7=$ _____

$6+13=$ _____


Name: _____

Addition Within 1000-Regrouping

 Directions: Find the sums.

1.	$\begin{array}{r} 451 \\ + 319 \\ \hline \end{array}$	2.	$\begin{array}{r} 115 \\ + 139 \\ \hline \end{array}$
3.	$\begin{array}{r} 737 \\ + 143 \\ \hline \end{array}$	4.	$\begin{array}{r} 555 \\ + 207 \\ \hline \end{array}$
5.	$\begin{array}{r} 654 \\ + 218 \\ \hline \end{array}$	6.	$\begin{array}{r} 765 \\ + 218 \\ \hline \end{array}$
7.	$\begin{array}{r} 387 \\ + 504 \\ \hline \end{array}$	8.	$\begin{array}{r} 336 \\ + 209 \\ \hline \end{array}$
9.	$\begin{array}{r} 389 \\ + 402 \\ \hline \end{array}$	10.	$\begin{array}{r} 633 \\ + 247 \\ \hline \end{array}$

____ I double checked my work.



Capital Craze

Use a yellow crayon to highlight all the words below that should be capitalized. Write the words correctly on the lines.



kentucky school texas
 reverand dave cat today
 christmas mr. lewis tommy
 august new year's day hello
 u.s.a boy tuesday
 road month horace stevi bruno
 just like josh gibson

1. _____
2. _____
3. _____
4. _____
5. _____
6. _____
7. _____

8. _____
9. _____
10. _____
11. _____
12. _____
13. _____
14. _____

Thursday

Number of the Day

___ < ___

543

Odd or Even

Hundreds	Tens	Ones


10 More

10 Less

100 More

100 Less

Name: _____



SUBTRACTION FLUENCY #2

$13-3=_____$

$14-10=_____$

$11-4=_____$

$10-8=_____$

$18-15=_____$

$7-6=_____$

$5-3=_____$

$11-9=_____$

$16-3=_____$

$8-3=_____$

$9-7=_____$

$18-13=_____$

$20-9=_____$

$15-7=_____$

$12-8=_____$

$20-16=_____$

$18-5=_____$


$16-7=_____$

$10-10=_____$

$10-3=_____$

Name: _____

Subtraction Within 1000-Regrouping

 Directions: Find the sums.

1.	$\begin{array}{r} 832 \\ - 627 \\ \hline \end{array}$	2.	$\begin{array}{r} 445 \\ - 228 \\ \hline \end{array}$
3.	$\begin{array}{r} 597 \\ - 459 \\ \hline \end{array}$	4.	$\begin{array}{r} 638 \\ - 219 \\ \hline \end{array}$
5.	$\begin{array}{r} 944 \\ - 525 \\ \hline \end{array}$	6.	$\begin{array}{r} 383 \\ - 267 \\ \hline \end{array}$
7.	$\begin{array}{r} 347 \\ - 239 \\ \hline \end{array}$	8.	$\begin{array}{r} 932 \\ - 703 \\ \hline \end{array}$
9.	$\begin{array}{r} 861 \\ - 102 \\ \hline \end{array}$	10.	$\begin{array}{r} 955 \\ - 846 \\ \hline \end{array}$

I double checked my work.

Friday

Number of the Day


352

Word Form

Base Ten Blocks

Expanded Form

Name: _____



ADDITION & SUBTRACTION FLUENCY #1

$3+6=_____$

$8-8=_____$

$16+2=_____$

$14-12=_____$

$15+2=_____$

$7-5=_____$

$19+0=_____$

$9-4=_____$

$6+5=_____$

$17-6=_____$

$14+4=_____$

$3-2=_____$

$0+20=_____$

$17-13=_____$

$9+6=_____$

$6-4=_____$

$9+4=_____$

$19-6=_____$

$4+15=_____$

$12-9=_____$

Name: _____

Word Problems

~~6d~~ Directions: Solve the word problems.

1. Kimi had some stickers. Her friend gave her 20 more stickers. Now Kimi has 73 stickers. How many stickers did Kimi start with?

Write and solve an equation to show this problem. Use a symbol for the unknown number.

_____ stickers

2. Sam found 24 seashells. Steve also found some seashells. They found 67 seashells altogether. How many seashells did Steve find?

Write and solve an equation to show this problem. Use a symbol for the unknown number.

_____ seashells

3. There were 23 students on the playground. 24 more students went to the playground. How many students are there now?

Write and solve an equation to show this problem. Use a symbol for the unknown number.

_____ students

____ I double checked my work.

Just Like Josh Gibson

Name _____

I can find missing words in a sentence.

Directions: Fill in the circle next to the correct answer.

1. The baseball team is playing a game on the _____.
 cheers threw sailed field
2. The crowd always _____ for their favorite team.
 soars cheers threw field
3. Could you see the pitcher as he _____ the ball to the catcher?
 threw bases cheers soar
4. Once the batter hits, the ball will _____ through the air.
 plate sailed soar threw
5. The ship _____ across the smooth water.
 threw bases sailed forties
6. My grandmother was born in the _____.
 forties cheers soar plate
7. Josh scored a point as he ran across home _____.
 field threw bases plate
8. My team had a player on each of the _____.
 bases cheers plate field
9. Sara's mother _____ for her as she walks across the stage to graduate.
 blame cheers idea townspeople